


# Thinking test



Mr Williams is taking a test. He has to place the cars on the 5x5 map so that no more than two cars lie in a straight line in any direction.

Can you show where the cars are placed?



© Stopsproblemsolving.co.uk 2015

OOOOO ●● A7\_P3


© Stopsproblemsolving UK 2015

# Thinking test



Mr Williams is taking a test. He has to place the cars on the 5x5 map so that no more than two cars lie in a straight line in any direction.

Can you show where the cars are placed?



© Stopsproblemsolving.co.uk 2015

OOOOO ●● A7\_P3


© Stopsproblemsolving UK 2015

# Thinking test



Mr Williams is taking a test. He has to place the cars on the 5x5 map so that no more than two cars lie in a straight line in any direction.

Can you show where the cars are placed?



© Stopsproblemsolving.co.uk 2015

OOOOO ●● A7\_P3


© Stopsproblemsolving UK 2015

# Thinking test



Mr Williams is taking a test. He has to place the cars on the 5x5 map so that no more than two cars lie in a straight line in any direction.

Can you show where the cars are placed?



© Stopsproblemsolving.co.uk 2015

OOOOO ●● A7\_P3

© Stopsproblemsolving UK 2015