

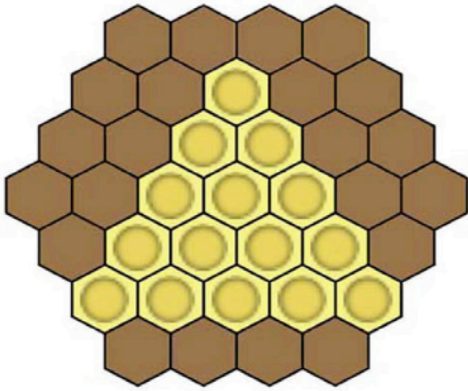

Baby Bumble Bee



Colour the hexagons using the least number of colours making sure that no hexagon touches a hexagon of the same colour.

What kind of pattern of colours do you get?

What if the grid starts with 7 hexagons as a base?



© Stopproblemsolving.co.uk 2015

00000 A6_P3

© Stopproblemsolving UK 2015

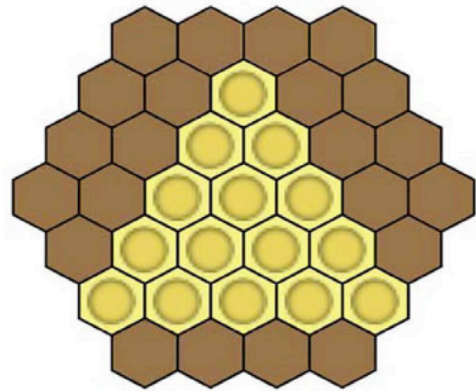

Baby Bumble Bee



Colour the hexagons using the least number of colours making sure that no hexagon touches a hexagon of the same colour.

What kind of pattern of colours do you get?

What if the grid starts with 7 hexagons as a base?



© Stopproblemsolving.co.uk 2015

00000 A6_P3

© Stopproblemsolving UK 2015

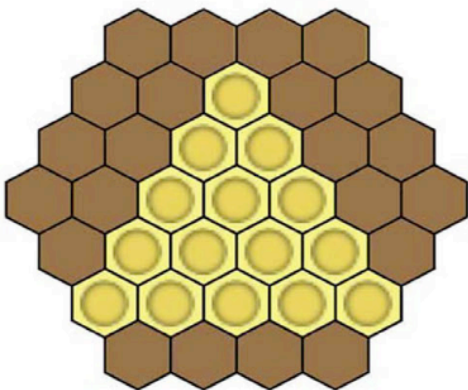

Baby Bumble Bee



Colour the hexagons using the least number of colours making sure that no hexagon touches a hexagon of the same colour.

What kind of pattern of colours do you get?

What if the grid starts with 7 hexagons as a base?



© Stopproblemsolving.co.uk 2015

00000 A6_P3

© Stopproblemsolving UK 2015

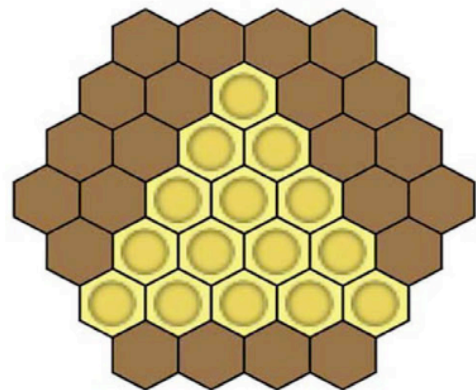

Baby Bumble Bee



Colour the hexagons using the least number of colours making sure that no hexagon touches a hexagon of the same colour.

What kind of pattern of colours do you get?

What if the grid starts with 7 hexagons as a base?



© Stopproblemsolving.co.uk 2015

00000 A6_P3

© Stopproblemsolving UK 2015