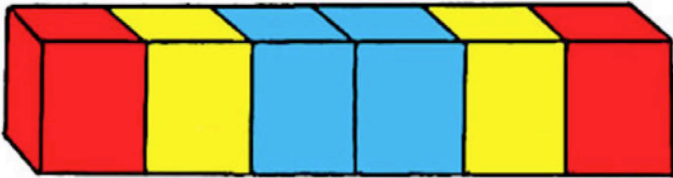


Symmetrical cubes



Josh had six cubes: two red, two yellow and two blue.

He joined them and made a symmetrical pattern.



How many different symmetrical arrangements can he make?

OOOOO A4_P2

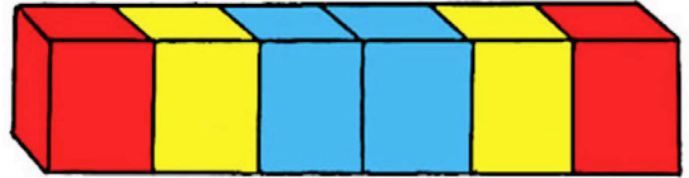
© Stopproblemsolving UK 2014

Symmetrical cubes



Josh had six cubes: two red, two yellow and two blue.

He joined them and made a symmetrical pattern.



How many different symmetrical arrangements can he make?

OOOOO A4_P2

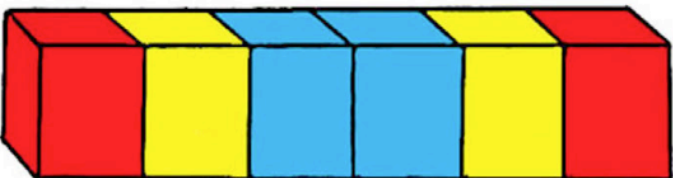
© Stopproblemsolving UK 2014

Symmetrical cubes



Josh had six cubes: two red, two yellow and two blue.

He joined them and made a symmetrical pattern.



How many different symmetrical arrangements can he make?

OOOOO A4_P2

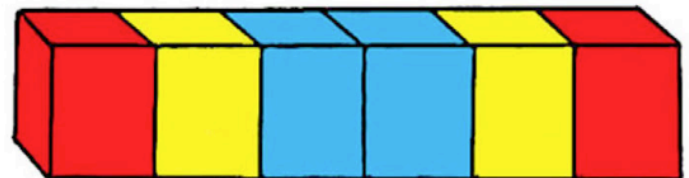
© Stopproblemsolving UK 2014

Symmetrical cubes



Josh had six cubes: two red, two yellow and two blue.

He joined them and made a symmetrical pattern.



How many different symmetrical arrangements can he make?

OOOOO A4_P2

© Stopproblemsolving UK 2014