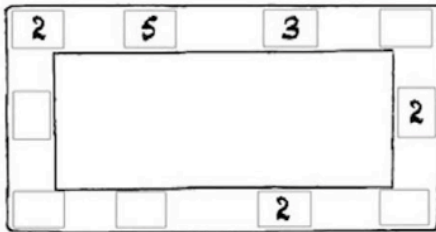


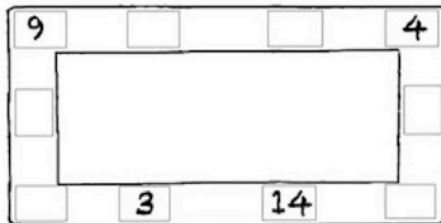
# Sheep Barn



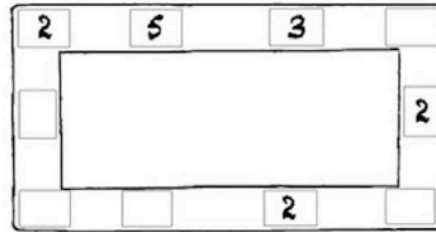
Federico is a farmer. He puts his sheep into groups in each barn. He wants each side of the barn to contain 16 sheep.

Arrange the sheep so that each line adds up to 16.

Can you make each line add up to 20?



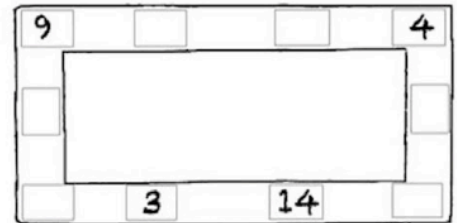
# Sheep Barn



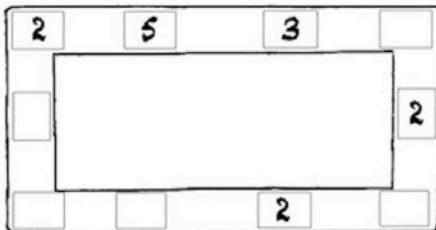
Federico is a farmer. He puts his sheep into groups in each barn. He wants each side of the barn to contain 16 sheep.

Arrange the sheep so that each line adds up to 16.

Can you make each line add up to 20?



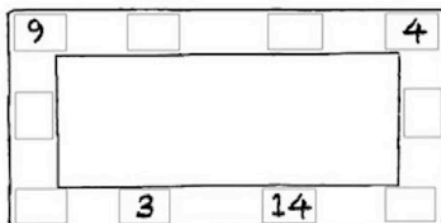
# Sheep Barn



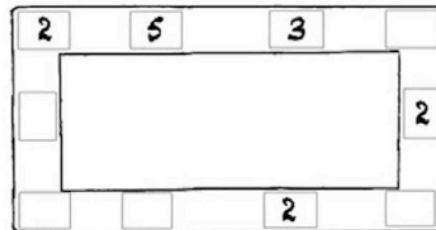
Federico is a farmer. He puts his sheep into groups in each barn. He wants each side of the barn to contain 16 sheep.

Arrange the sheep so that each line adds up to 16.

Can you make each line add up to 20?



# Sheep Barn



Federico is a farmer. He puts his sheep into groups in each barn. He wants each side of the barn to contain 16 sheep.

Arrange the sheep so that each line adds up to 16.

Can you make each line add up to 20?

