


Biscuit Square



Aisha made a squared shape tiramisú cake for her mum's birthday.

Each side had eight vertical finger biscuits.

If each side shares the biscuits placed at the corner like the picture below, how many finger biscuits did she use altogether?



Try different cake arrangements.

What if Aisha tries to make a triangular tiramisú? How many finger biscuits would she need for a five-sided cake?

And for a seven-sided cake?

00000 A3_P3

© Stopproblemsolving UK 2015


Biscuit Square



Aisha made a squared shape tiramisú cake for her mum's birthday.

Each side had eight vertical finger biscuits.

If each side shares the biscuits placed at the corner like the picture below, how many finger biscuits did she use altogether?



Try different cake arrangements.

What if Aisha tries to make a triangular tiramisú? How many finger biscuits would she need for a five-sided cake?

And for a seven-sided cake?

00000 A3_P3

© Stopproblemsolving UK 2015


Biscuit Square



Aisha made a squared shape tiramisú cake for her mum's birthday.

Each side had eight vertical finger biscuits.

If each side shares the biscuits placed at the corner like the picture below, how many finger biscuits did she use altogether?



Try different cake arrangements.

What if Aisha tries to make a triangular tiramisú? How many finger biscuits would she need for a five-sided cake?

And for a seven-sided cake?

00000 A3_P3

© Stopproblemsolving UK 2015



Biscuit Square



Aisha made a squared shape tiramisú cake for her mum's birthday.

Each side had eight vertical finger biscuits.

If each side shares the biscuits placed at the corner like the picture below, how many finger biscuits did she use altogether?



Try different cake arrangements.

What if Aisha tries to make a triangular tiramisú? How many finger biscuits would she need for a five-sided cake?

And for a seven-sided cake?

00000 A3_P3

© Stopproblemsolving UK 2015