


Cherries, lemons or oranges

There are 3 cherries, 3 lemons and 3 oranges in the machine.



How could you arrange the fruits on the 3x3 grid?

How could you make each row have the same total if the cherry = 1; the lemon = 2 and the orange = 3?

How could you make each row and column have the same total?


What else could you do?

00000  A2_P3

© Stopproblemsolving UK 2015

Cherries, lemons or oranges

There are 3 cherries, 3 lemons and 3 oranges in the machine.



How could you arrange the fruits on the 3x3 grid?

How could you make each row have the same total if the cherry = 1; the lemon = 2 and the orange = 3?

How could you make each row and column have the same total?


What else could you do?

00000  A2_P3

© Stopproblemsolving UK 2015

Cherries, lemons or oranges

There are 3 cherries, 3 lemons and 3 oranges in the machine.



How could you arrange the fruits on the 3x3 grid?

How could you make each row have the same total if the cherry = 1; the lemon = 2 and the orange = 3?

How could you make each row and column have the same total?


What else could you do?

00000  A2_P3

© Stopproblemsolving UK 2015

Cherries, lemons or oranges

There are 3 cherries, 3 lemons and 3 oranges in the machine.



How could you arrange the fruits on the 3x3 grid?

How could you make each row have the same total if the cherry = 1; the lemon = 2 and the orange = 3?

How could you make each row and column have the same total?

What else could you do?

00000  A2_P3

© Stopproblemsolving UK 2015