


Ride a horse



Aisha had a horse ride.
She paid between 20p and 30p.


She paid exactly three coins
for the ride.
Which coins did she use?

Find as many ways as you can.

00000 A2_P1

© Stopproblemsolving UK 2014

Ride a horse



Aisha had a horse ride.
She paid between 20p and 30p.


She paid exactly three coins
for the ride.
Which coins did she use?

Find as many ways as you can.

00000 A2_P1

© Stopproblemsolving UK 2014

Ride a horse



Aisha had a horse ride.
She paid between 20p and 30p.


She paid exactly three coins
for the ride.
Which coins did she use?

Find as many ways as you can.

00000 A2_P1

© Stopproblemsolving UK 2014

Ride a horse



Aisha had a horse ride.
She paid between 20p and 30p.

She paid exactly three coins
for the ride.
Which coins did she use?

Find as many ways as you can.

00000 A2_P1

© Stopproblemsolving UK 2014