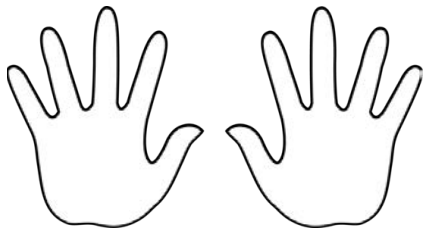


Try it!



- Fill in the missing numbers:
 - seven is one less than _____
 - 4 is one more than _____
 - _____ is one less than 6
 - _____ is one more than 4

2. How many fingers will be showing if I hide one.



3. Look at the number on the dice below. I roll again and get a number that is one less. What number do I roll?



Now roll the dice again ...

Apply it!



1. Roman wrote some number lines but missed out some numbers. Can you fill in his number lines?

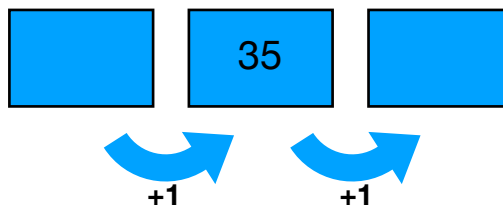
3	4		6		
---	---	--	---	--	--

32	33		35	
----	----	--	----	--


	14	15		17		19
--	----	----	--	----	--	----

2. Aisha has one penny more than Luca.
 Josh has one penny less than Luca.
 Luca has 37 pence.
 How much money do Aisha and Luca have?

3. Fill in the empty boxes:



Fly with it!



1. Aisha wrote out some calculations.

$$13 + 1 =$$

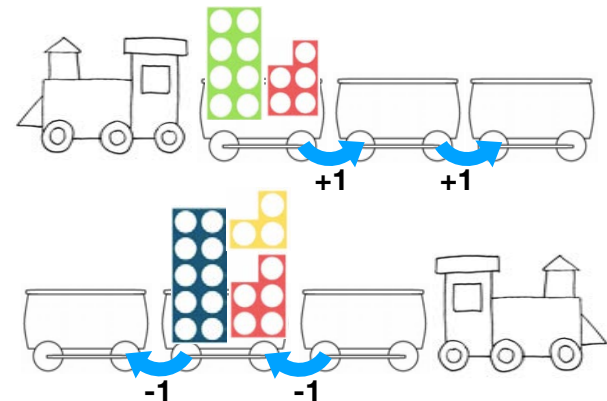
$$14 + 1 =$$

$$15 + 1 =$$

What next three calculations should she write?

2. Roman said: "One less than 54 is the same as one more than 52". Is he correct? Prove it!

3. Complete these sequences:



How many other arrangements can you make?