

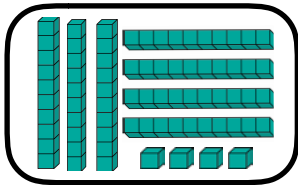
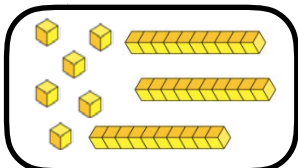
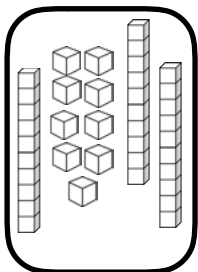
## Try it!



1. Match the words to the correct numbers.

- |             |    |
|-------------|----|
| Fifty six   | 47 |
| Ninety two  | 89 |
| Forty seven | 56 |
| Eighty nine | 92 |

2. Write these numbers as numerals.



3. Show me 15 cubes. How might you group them?

- Find at least two different ways.

## Apply it!

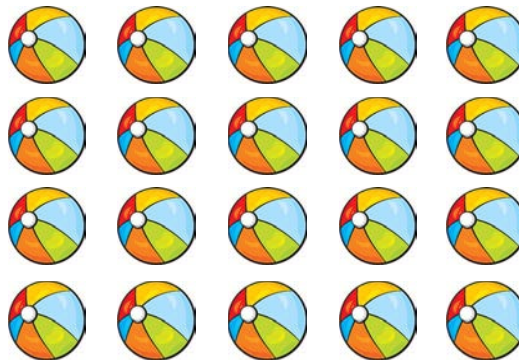


1. Look at the wall below. How could you count the red tiles? Is there another way?

How could you count the red and the yellow?  
How could you count the blue tiles?  
How many tiles are there altogether?



2. How many balls are there?



Why is this arrangement (order) easier to count?

## Fly with it!



1. Aisha has written the number seventy six.

She wrote 706.

Is she right? Can you prove it?

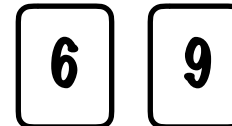
2. Look at the grid below

34	35		
38		40	

What number will go where the is?

Write your answer in digits and words.

3. Roman picked out these digit cards:



What is the greatest two digit number he can make?