


Try it!



1. Put these cards in order:

--	--	--	--	--



2. What comes next?

11, 12, 13, 14, __, __, __, __

46, 47, 48, __, __, __, __

23, 22, 21, __, __, __, __

74, 73, 72, __, __, __, __

3. What comes next?

97, 98 __, __, __

112, 111, __, __, __, __

Apply it!



1. Josh was given the task of counting all the children during assembly.

He counted 96 children but 7 more children joined in late.

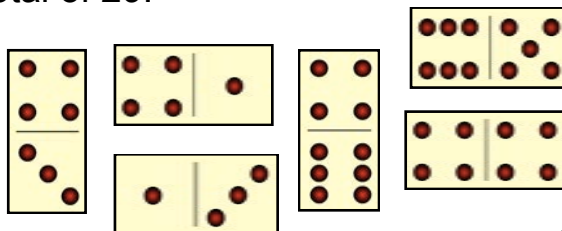
What were the next 7 numbers belonging to these children?

2. Roman drew a number line. What are the next eight numbers that Roman will have to write?




What eight numbers should Roman write before 41?

3. Tick the dominoes that make a total of 29.



Fly with it!



1. Josh is counting on from 126. What are the next five numbers that he should say?

Roman is also counting. He is counting back from 113. What are the next five numbers that he should say?

2. Draw the correct number of dots to represent the number inside the green circle. Remember each domino has a maximum number of twelve dots (six on each side).

				33
--	--	--	--	----

				42
--	--	--	--	----