

Aisha's brother went to the cash machine. He drew out the same amount of money as he had in his pocket. He then spent £40 on a meal.

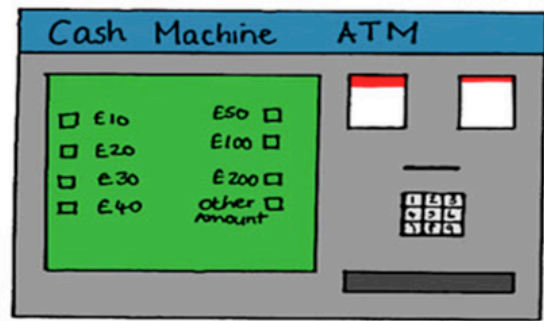
He went back to the cash machine. He drew the same amount of money as he had in his pocket. He then spent a further £40 on a new pair of trainers.

He did this a third time. He spent a further £40 and he then had no money left.

How much money did he have at the start?

00000 G7\_P1

© Stopproblemsolving UK 2014



Aisha's brother went to the cash machine. He drew out the same amount of money as he had in his pocket. He then spent £40 on a meal.

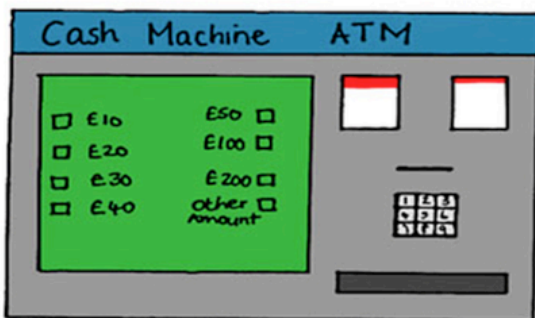
He went back to the cash machine. He drew the same amount of money as he had in his pocket. He then spent a further £40 on a new pair of trainers.

He did this a third time. He spent a further £40 and he then had no money left.

How much money did he have at the start?

00000 G7\_P1

© Stopproblemsolving UK 2014



Aisha's brother went to the cash machine. He drew out the same amount of money as he had in his pocket. He then spent £40 on a meal.

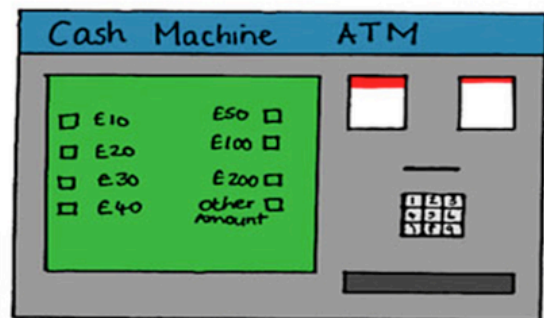
He went back to the cash machine. He drew the same amount of money as he had in his pocket. He then spent a further £40 on a new pair of trainers.

He did this a third time. He spent a further £40 and he then had no money left.

How much money did he have at the start?

00000 G7\_P1

© Stopproblemsolving UK 2014



Aisha's brother went to the cash machine. He drew out the same amount of money as he had in his pocket. He then spent £40 on a meal.

He went back to the cash machine. He drew the same amount of money as he had in his pocket. He then spent a further £40 on a new pair of trainers.

He did this a third time. He spent a further £40 and he then had no money left.

How much money did he have at the start?

00000 G7\_P1

© Stopproblemsolving UK 2014