



Roman's marble shop

Roman has a marble shop.


He ordered 19 large and 3 small bags of marbles.

When the marbles arrived, the bags were broken and all the marbles were loose.

Roman counted 224 marbles.

How many marbles should he put into a large bag?

How many in a small pack?



Roman's marble shop

Roman has a marble shop.


He ordered 19 large and 3 small bags of marbles.

When the marbles arrived, the bags were broken and all the marbles were loose.

Roman counted 224 marbles.

How many marbles should he put into a large bag?

How many in a small pack?



Roman's marble shop

Roman has a marble shop.


He ordered 19 large and 3 small bags of marbles.

When the marbles arrived, the bags were broken and all the marbles were loose.

Roman counted 224 marbles.

How many marbles should he put into a large bag?

How many in a small pack?



Roman's marble shop

Roman has a marble shop.

He ordered 19 large and 3 small bags of marbles.

When the marbles arrived, the bags were broken and all the marbles were loose.

Roman counted 224 marbles.

How many marbles should he put into a large bag?

How many in a small pack?

