


## Reading time




Roman started to read a book on Thursday.  
On Friday he read 10 more pages than on Thursday.  
He reached page 62.  
How many pages did he read on Thursday?

OOOOO G2\_P1

© Stopspblemsolving UK 2014

## Reading time




Roman started to read a book on Thursday.  
On Friday he read 10 more pages than on Thursday.  
He reached page 62.  
How many pages did he read on Thursday?

OOOOO G2\_P1

© Stopspblemsolving UK 2014

## Reading time




Roman started to read a book on Thursday.  
On Friday he read 10 more pages than on Thursday.  
He reached page 62.  
How many pages did he read on Thursday?

OOOOO G2\_P1

© Stopspblemsolving UK 2014

## Reading time



Roman started to read a book on Thursday.  
On Friday he read 10 more pages than on Thursday.  
He reached page 62.  
How many pages did he read on Thursday?

OOOOO G2\_P1

© Stopspblemsolving UK 2014