


Diversity village




44 people live in Diversity village.
Each shelter has a different number
of people.
Each line of three shelters has 18 people
living in it.

How many people live in each shelter?

OOOOO B7_P1

© Stopsproblemsolving UK 2014

Diversity village



44 people live in Diversity village.
Each shelter has a different number
of people.
Each line of three shelters has 18 people
living in it.

How many people live in each shelter?

OOOOO B7_P1

© Stopsproblemsolving UK 2014

Diversity village




44 people live in Diversity village.
Each shelter has a different number
of people.
Each line of three shelters has 18 people
living in it.

How many people live in each shelter?

OOOOO B7_P1

© Stopsproblemsolving UK 2014

Diversity village



44 people live in Diversity village.
Each shelter has a different number
of people.
Each line of three shelters has 18 people
living in it.

How many people live in each shelter?

OOOOO B7_P1

© Stopsproblemsolving UK 2014