


Snakes and Ladders




Your counter is on 9.
 You roll a dice and after two moves
 you land on 16.
 Find all the different ways you can
 do it.

What if you roll the dice three times?

OOOOO ●● B1_P1

© Stopproblemsolving UK 2014

Snakes and Ladders




Your counter is on 9.
 You roll a dice and after two moves
 you land on 16.
 Find all the different ways you can
 do it.

What if you roll the dice three times?

OOOOO ●● B1_P1

© Stopproblemsolving UK 2014

Snakes and Ladders




Your counter is on 9.
 You roll a dice and after two moves
 you land on 16.
 Find all the different ways you can
 do it.

What if you roll the dice three times?

OOOOO ●● B1_P1

© Stopproblemsolving UK 2014

Snakes and Ladders



Your counter is on 9.
 You roll a dice and after two moves
 you land on 16.
 Find all the different ways you can
 do it.

What if you roll the dice three times?

OOOOO ●● B1_P1

© Stopproblemsolving UK 2014