

# Aisha's ice creams

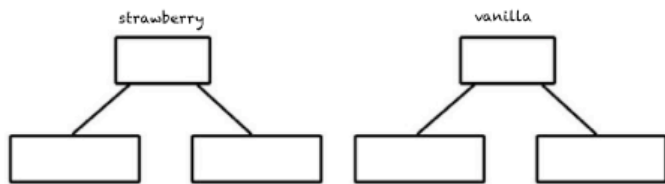
Aisha needs to solve an ice-cream problem and she needs your help.

Aisha has vanilla and strawberry ice-creams. Sometimes she has her ice-creams with caramel syrup and sometimes she has them with chocolate syrup...



Place all the following clues on the diagrams below.

She needs 6 strawberry ice-creams  
 She needs double vanilla than strawberry ice-creams.  
 She needs two more strawberry with caramel syrup than strawberry with chocolate syrup.  
 There are double the amount of vanilla with caramel syrup than strawberry with caramel syrup.



How many of each are there?

# Aisha's ice creams

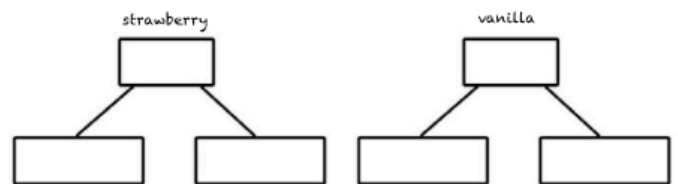
Aisha needs to solve an ice-cream problem and she needs your help.

Aisha has vanilla and strawberry ice-creams. Sometimes she has her ice-creams with caramel syrup and sometimes she has them with chocolate syrup...



Place all the following clues on the diagrams below.

She needs 6 strawberry ice-creams  
 She needs double vanilla than strawberry ice-creams.  
 She needs two more strawberry with caramel syrup than strawberry with chocolate syrup.  
 There are double the amount of vanilla with caramel syrup than strawberry with caramel syrup.



How many of each are there?

# Aisha's ice creams

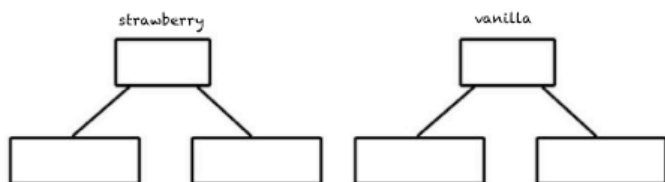
Aisha needs to solve an ice-cream problem and she needs your help.

Aisha has vanilla and strawberry ice-creams. Sometimes she has her ice-creams with caramel syrup and sometimes she has them with chocolate syrup...



Place all the following clues on the diagrams below.

She needs 6 strawberry ice-creams  
 She needs double vanilla than strawberry ice-creams.  
 She needs two more strawberry with caramel syrup than strawberry with chocolate syrup.  
 There are double the amount of vanilla with caramel syrup than strawberry with caramel syrup.



How many of each are there?

# Aisha's ice creams

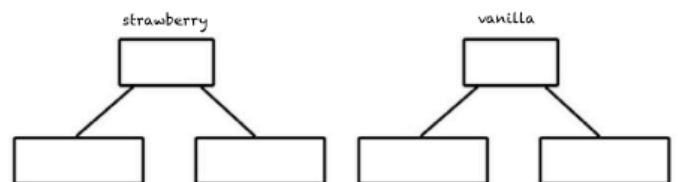
Aisha needs to solve an ice-cream problem and she needs your help.

Aisha has vanilla and strawberry ice-creams. Sometimes she has her ice-creams with caramel syrup and sometimes she has them with chocolate syrup...



Place all the following clues on the diagrams below.

She needs 6 strawberry ice-creams  
 She needs double vanilla than strawberry ice-creams.  
 She needs two more strawberry with caramel syrup than strawberry with chocolate syrup.  
 There are double the amount of vanilla with caramel syrup than strawberry with caramel syrup.



How many of each are there?