




# Height and width 2




How many puzzle pieces would be in the next T-shape?


Can you predict the number of pieces in the tenth T-shape? What about the fifteenth shape?

How can you work out how the 50th shape looks like without drawing out the shape?

Can you make a table to show the number pieces you might need?



# Height and width 2




How many puzzle pieces would be in the next T-shape?


Can you predict the number of pieces in the tenth T-shape? What about the fifteenth shape?

How can you work out how the 50th shape looks like without drawing out the shape?

Can you make a table to show the number pieces you might need?



# Height and width 2




How many puzzle pieces would be in the next T-shape?


Can you predict the number of pieces in the tenth T-shape? What about the fifteenth shape?

How can you work out how the 50th shape looks like without drawing out the shape?

Can you make a table to show the number pieces you might need?



# Height and width 2



How many puzzle pieces would be in the next T-shape?

Can you predict the number of pieces in the tenth T-shape? What about the fifteenth shape?

How can you work out how the 50th shape looks like without drawing out the shape?

Can you make a table to show the number pieces you might need?

