




Height and width




Look at the pattern of shapes.
Write how many pieces are needed to make each one.

Can you work out what the 50th shape looks like without drawing out the shape?

shape number	1st	2nd	3th	...	50th
number of pieces					



Height and width




Look at the pattern of shapes.
Write how many pieces are needed to make each one.

Can you work out what the 50th shape looks like without drawing out the shape?

shape number	1st	2nd	3th	...	50th
number of pieces					



Height and width




Look at the pattern of shapes.
Write how many pieces are needed to make each one.

Can you work out what the 50th shape looks like without drawing out the shape?

shape number	1st	2nd	3th	...	50th
number of pieces					



Height and width



Look at the pattern of shapes.
Write how many pieces are needed to make each one.

Can you work out what the 50th shape looks like without drawing out the shape?

shape number	1st	2nd	3th	...	50th
number of pieces					