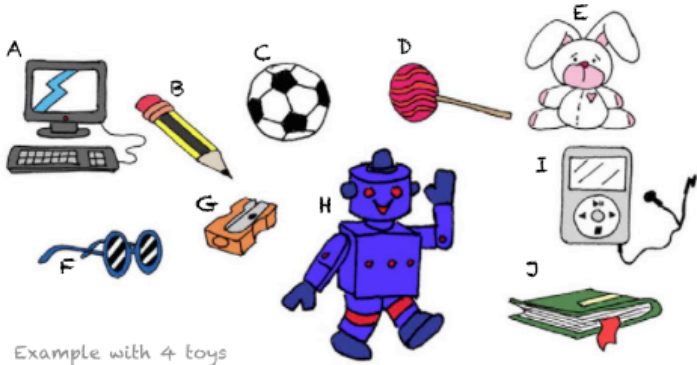




Josh's toys

Josh wants to pack his toys away. How many different possibilities does he have to pack his 10 toys in pairs?



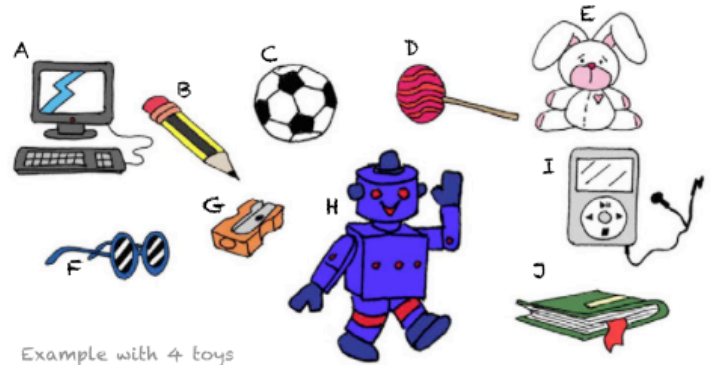
Example with 4 toys

Number of toys	Pairs	Total
4	AB BC CD AC BD AD	6



Josh's toys

Josh wants to pack his toys away. How many different possibilities does he have to pack his 10 toys in pairs?



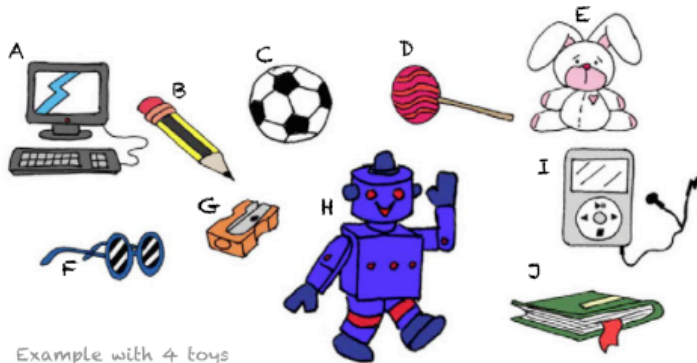
Example with 4 toys

Number of toys	Pairs	Total
4	AB BC CD AC BD AD	6



Josh's toys

Josh wants to pack his toys away. How many different possibilities does he have to pack his 10 toys in pairs?



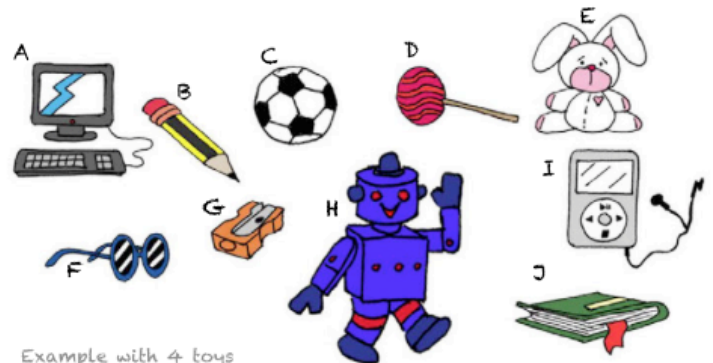
Example with 4 toys

Number of toys	Pairs	Total
4	AB BC CD AC BD AD	6



Josh's toys

Josh wants to pack his toys away. How many different possibilities does he have to pack his 10 toys in pairs?



Example with 4 toys

Number of toys	Pairs	Total
4	AB BC CD AC BD AD	6

