


# Southbank Skate Park

Josh's house is 10 blocks from the skate park.  
On his way to the skate park, he meets  
his classmate Luca, after 3 blocks.  
They meet their friend, Thomas, after another  
4 blocks.  
They all reach the skate park together.

How many blocks does Thomas walk with his  
friends to the skate park?

How many blocks away is Josh from his home  
when he and Luca meet Thomas?



OOOOO ● E3\_P1


© Stopsproblemsolving UK 2014

# Southbank Skate Park

Josh's house is 10 blocks from the skate park.  
On his way to the skate park, he meets  
his classmate Luca, after 3 blocks.  
They meet their friend, Thomas, after another  
4 blocks.  
They all reach the skate park together.

How many blocks does Thomas walk with his  
friends to the skate park?

How many blocks away is Josh from his home  
when he and Luca meet Thomas?



OOOOO ● E3\_P1


© Stopsproblemsolving UK 2014

# Southbank Skate Park

Josh's house is 10 blocks from the skate park.  
On his way to the skate park, he meets  
his classmate Luca, after 3 blocks.  
They meet their friend, Thomas, after another  
4 blocks.  
They all reach the skate park together.

How many blocks does Thomas walk with his  
friends to the skate park?

How many blocks away is Josh from his home  
when he and Luca meet Thomas?



OOOOO ● E3\_P1


© Stopsproblemsolving UK 2014

# Southbank Skate Park

Josh's house is 10 blocks from the skate park.  
On his way to the skate park, he meets  
his classmate Luca, after 3 blocks.  
They meet their friend, Thomas, after another  
4 blocks.  
They all reach the skate park together.

How many blocks does Thomas walk with his  
friends to the skate park?

How many blocks away is Josh from his home  
when he and Luca meet Thomas?



OOOOO ● E3\_P1

© Stopsproblemsolving UK 2014