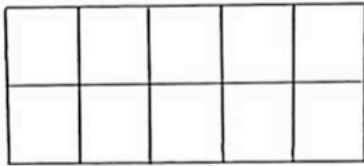


The magic eye




This rectangle has 9 straight lines and 14 squares.

Can you find them?



This one has 9 straight lines and 20 squares. Can you find them?



© Stopsproblemsolving.co.uk 2014

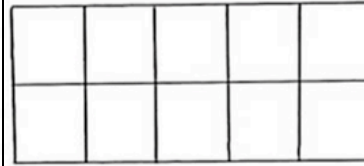


Find the minimum number of lines needed to make a rectangle with exactly 40 squares.

OOOOO E2_P1

© Stopsproblemsolving UK 2014

The magic eye

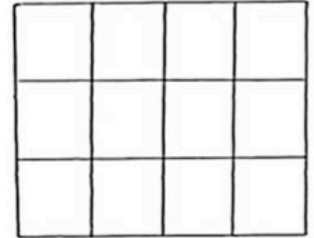


This rectangle has 9 straight lines and 14 squares.

Can you find them?



This one has 9 straight lines and 20 squares. Can you find them?



© Stopsproblemsolving.co.uk 2014

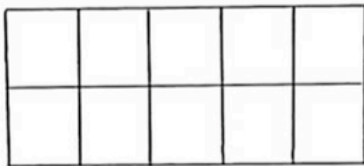


Find the minimum number of lines needed to make a rectangle with exactly 40 squares.

OOOOO E2_P1

© Stopsproblemsolving UK 2014

The magic eye




This rectangle has 9 straight lines and 14 squares.

Can you find them?



This one has 9 straight lines and 20 squares. Can you find them?



© Stopsproblemsolving.co.uk 2014

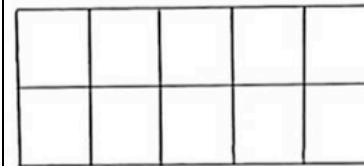


Find the minimum number of lines needed to make a rectangle with exactly 40 squares.

OOOOO E2_P1

© Stopsproblemsolving UK 2014

The magic eye




This rectangle has 9 straight lines and 14 squares.

Can you find them?



This one has 9 straight lines and 20 squares. Can you find them?



© Stopsproblemsolving.co.uk 2014



Find the minimum number of lines needed to make a rectangle with exactly 40 squares.

OOOOO E2_P1

© Stopsproblemsolving UK 2014