


Who is my best friend?

Aisha, Lisa, Josh and Luca each have a best friend.
They all went shopping with £64 pounds between them. They spent all the money.

Aisha spent £2 Lisa spent £4 Josh spent £8
Luca spent £6



Find the name of each best friend using these clues

Betty spent the same amount of money as one of them.
Roman spent twice as much money as one of them.
Leon spent three times as much money as one of them.
Ellie spent four times as much as one of them.


00000  D8

© Stopspblemsolving UK 2016

Who is my best friend?

Aisha, Lisa, Josh and Luca each have a best friend.
They all went shopping with £64 pounds between them. They spent all the money.

Aisha spent £2 Lisa spent £4 Josh spent £8
Luca spent £6



Find the name of each best friend using these clues

Betty spent the same amount of money as one of them.
Roman spent twice as much money as one of them.
Leon spent three times as much money as one of them.
Ellie spent four times as much as one of them.


00000  D8

© Stopspblemsolving UK 2016

Who is my best friend?

Aisha, Lisa, Josh and Luca each have a best friend.
They all went shopping with £64 pounds between them. They spent all the money.

Aisha spent £2 Lisa spent £4 Josh spent £8
Luca spent £6



Find the name of each best friend using these clues

Betty spent the same amount of money as one of them.
Roman spent twice as much money as one of them.
Leon spent three times as much money as one of them.
Ellie spent four times as much as one of them.


00000  D8

© Stopspblemsolving UK 2016

Who is my best friend?


Aisha, Lisa, Josh and Luca each have a best friend.
They all went shopping with £64 pounds between them. They spent all the money.

Aisha spent £2 Lisa spent £4 Josh spent £8
Luca spent £6



Find the name of each best friend using these clues

Betty spent the same amount of money as one of them.
Roman spent twice as much money as one of them.
Leon spent three times as much money as one of them.
Ellie spent four times as much as one of them.

00000  D8

© Stopspblemsolving UK 2016