




Fishbowl

A Guppy fish cost £ 1.40.

A Betta fish cost £ 1.80.



Aisha paid exactly £ 20 for some fish.

How many of each kind did she buy?

Can you find a second answer?

00000 07


© Stopsproblemsolving UK 2016



Fishbowl

A Guppy fish cost £ 1.40.

A Betta fish cost £ 1.80.



Aisha paid exactly £ 20 for some fish.

How many of each kind did she buy?

Can you find a second answer?

00000 07


© Stopsproblemsolving UK 2016



Fishbowl

A Guppy fish cost £ 1.40.

A Betta fish cost £ 1.80.



Aisha paid exactly £ 20 for some fish.

How many of each kind did she buy?

Can you find a second answer?

00000 07


© Stopsproblemsolving UK 2016



Fishbowl

A Guppy fish cost £ 1.40.

A Betta fish cost £ 1.80.



Aisha paid exactly £ 20 for some fish.

How many of each kind did she buy?

Can you find a second answer?

00000 07

© Stopsproblemsolving UK 2016