


Helium balloons



Aisha went to the circus and bought some balloons.
She spent £14 pounds on 50 balloons



Red balloons
cost 50p

Green balloons
cost 10p each

Yellow balloons
cost 5p

She bought the same number of two colours.

How many did she buy?


OOOOO D6_P1

© Stopproblemsolving UK 2014

Helium balloons



Aisha went to the circus and bought some balloons.
She spent £14 pounds on 50 balloons



Red balloons
cost 50p

Green balloons
cost 10p each

Yellow balloons
cost 5p

She bought the same number of two colours.

How many did she buy?


OOOOO D6_P1

© Stopproblemsolving UK 2014

Helium balloons



Aisha went to the circus and bought some balloons.
She spent £14 pounds on 50 balloons



Red balloons
cost 50p

Green balloons
cost 10p each

Yellow balloons
cost 5p

She bought the same number of two colours.

How many did she buy?


OOOOO D6_P1

© Stopproblemsolving UK 2014

Helium balloons



Aisha went to the circus and bought some balloons.
She spent £14 pounds on 50 balloons



Red balloons
cost 50p

Green balloons
cost 10p each

Yellow balloons
cost 5p

She bought the same number of two colours.

How many did she buy?

OOOOO D6_P1

© Stopproblemsolving UK 2014