


Aisha's birthday



Roman paid £21 for five presents.




For A and B he paid a total of £6.
For B and C he paid a total of £10.
For C and D he paid a total of £7.
For D and E he paid a total of £9.

How much did Roman pay for each present?

Aisha's birthday



Roman paid £21 for five presents.




For A and B he paid a total of £6.
For B and C he paid a total of £10.
For C and D he paid a total of £7.
For D and E he paid a total of £9.

How much did Roman pay for each present?

Aisha's birthday



Roman paid £21 for five presents.




For A and B he paid a total of £6.
For B and C he paid a total of £10.
For C and D he paid a total of £7.
For D and E he paid a total of £9.

How much did Roman pay for each present?

Aisha's birthday



Roman paid £21 for five presents.



For A and B he paid a total of £6.
For B and C he paid a total of £10.
For C and D he paid a total of £7.
For D and E he paid a total of £9.

How much did Roman pay for each present?