


Stups and Slifs




Stups have 9 spots.
Slifs have 4 spots.

Altogether some Stups and Slifs have 48 spots.
How many Stups are there?
How many Slifs are there?

What if Stups have 7 spots and Slifs have 5 spots
and there are 140 spots altogether?

Find as many solutions as you can.

Stups and Slifs




Stups have 9 spots.
Slifs have 4 spots.

Altogether some Stups and Slifs have 48 spots.
How many Stups are there?
How many Slifs are there?

What if Stups have 7 spots and Slifs have 5 spots
and there are 140 spots altogether?

Find as many solutions as you can.

Stups and Slifs




Stups have 9 spots.
Slifs have 4 spots.

Altogether some Stups and Slifs have 48 spots.
How many Stups are there?
How many Slifs are there?

What if Stups have 7 spots and Slifs have 5 spots
and there are 140 spots altogether?

Find as many solutions as you can.

Stups and Slifs



Stups have 9 spots.
Slifs have 4 spots.

Altogether some Stups and Slifs have 48 spots.
How many Stups are there?
How many Slifs are there?

What if Stups have 7 spots and Slifs have 5 spots
and there are 140 spots altogether?

Find as many solutions as you can.