

# Animal shape puzzle






Each animal stands for a number.

The numbers shown are the total of three numbers in a row or column.

Can you find the totals and what each animal represents?

			21
			13
			15
19	13	17	

 =  
 =  
 =